



# SPEND

Take a look at the cost of each item. Circle all of the coins you will need to use to pay for each item.

 **\$1.50**





 **\$0.75**



 **\$1.00**




 **\$1.25**



 **\$0.65**



 **\$0.85**

